

# SOCIAL STUDIES PLE 2012

## CANDIDATE'S INFORMATION

Index number :

|  |  |  |  |  |  |  |  |  |
|--|--|--|--|--|--|--|--|--|
|  |  |  |  |  |  |  |  |  |
|--|--|--|--|--|--|--|--|--|

Name :

\_\_\_\_\_

Signature :

\_\_\_\_\_

School name :

\_\_\_\_\_

District name :

\_\_\_\_\_

## SECTION A: 40 MARKS

1. Name the largest natural forest found in the central part of Uganda.  
\_\_\_\_\_
2. Mention the traditional cash crop that grows well on volcanic soils of East Africa.  
\_\_\_\_\_
3. What is the main cause of land fragmentation in Uganda?  
\_\_\_\_\_
4. Give any one problem caused by too much rainfall to the community.  
\_\_\_\_\_
5. Why should children be encouraged to plant trees to school?  
\_\_\_\_\_
6. Mention any one human activity which causes the number of wild animals to reduce in National Game parks.  
\_\_\_\_\_
7. Give the quickest means in which government sends information to its citizens.  
\_\_\_\_\_
8. Mention any one way in which African countries can improve on agricultural production.  
\_\_\_\_\_

9. Apart from constructing schools, state any one way missionaries contributed in improving the life of the people of Africa.
- 
10. Name the country in the Horn of Africa which was not colonized.
- 
11. Which major activity do farmers in Uganda carry out during a dry season?
- 
12. State any one way in which wild animals are important to the people of East Africa.
- 
13. Which king in Uganda did Captain Lugard sign an agreement with in 1890?
- 
14. State any one reason why persons aged 18 and above take part in national elections.
- 
15. Apart from cultivating crops and grazing animals, mention any other way the people of Uganda use land to earn a living.
- 
16. State any one reason why African countries are not developing at the same level.
- 
17. What is an import tax?
- 
- 
18. What causes ocean currents?
- 
19. Give any one reason why people should not settle in swamps.
- 
20. Why is the government of Uganda building more classrooms in schools across the country?
- 
21. Give any one advantage a tarmac road has over a murrum road.
-

22. Mention any one danger of polythene paper bags to soil.
- 
23. State any one way in which lakes promote crop farming.
- 
24. Write any one responsibility carried out by the National Environment Management Authority (NEMA).
- 
25. Mention any one material in our environment which can be used for making balls and skipping ropes to enjoy physical Education (P.E) lessons.
- 
26. Name any one group of people who provide security services in our community.
- 
27. In which one way did Dr. Livingston show the evil of slave trade in Africa?
- 
28. Mention any one contribution of a teacher to the community?
- 
29. Mention any one peaceful methods used by British establish their rule in Uganda.
- 
30. In what direction will Opio face if he turns through  $180^\circ$  clockwise from the North?
- 
31. Mention any one problem people living in mountain areas face.
- 
32. State any one way in which the government of Uganda helps pastoralists in semi-arid areas to overcome the problem of lack of water.
- 
33. Mention any one factor that makes lumbering to be done in Democratic Republic of Congo (DRC).
- 
34. Give any one characteristic of rift valley lakes.
- 
35. In which one way did the coming of early migrants to the coast of East Africa affect lives of the people in that area?
-

For each of the questions 36 to 40, answer EITHER Christianity OR Islamic questions but not both. No marks will be awarded to a candidate who attempts both alternatives in a particular number

36. Either: Name the mother of Isaac.

Or: Name the father of prophet Muhammad (PBUH).

37. Either: As a Christian child, how can you show love to your elders?

Or: As an Islamic child, how can you show love to your elder?

38. Either: Give any one example of sin that a pupil can commit at school.

Or: Give any one example of sin that a pupil can commit at school.

39. Either: What was the work of Joseph, the husband of Mary, mother of Jesus Christ?

Or: What was the work of Prophet Muhammad's first wife?

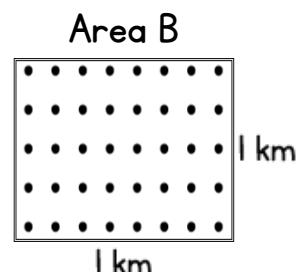
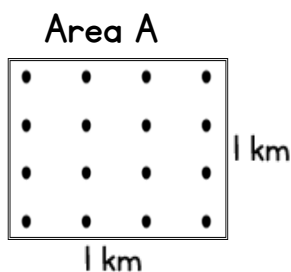
40. Either: Mention any one similarity between Christianity and Islam.

Or: Mention any one similarity between Islam and Christianity.

## **SECTION B: 60 MARKS**

Questions 41 to 55 carry four marks each

41. The diagrams below show the population distribution of two different areas in a country. Use them to answer the questions that follow.



a. What is the population distribution of area;

A \_\_\_\_\_

B \_\_\_\_\_

b. Mention any one disadvantage of the population distribution of area B to a country.

\_\_\_\_\_

c. Give any one advantage of the people living in area A over those living in area B

\_\_\_\_\_

42. a. Mention any two economic activities carried out in Kalangala District.

i. \_\_\_\_\_

ii. \_\_\_\_\_

b. State any one problem that has slowed down the development of Kalangala District.

\_\_\_\_\_

c. In Which way can the problem you have mentioned in (b) above be solved?

\_\_\_\_\_

43. a. Give one safe method of keeping money.

\_\_\_\_\_

b. State any three reasons why Ugandans are encouraged to save money today.

i. \_\_\_\_\_

ii. \_\_\_\_\_

iii. \_\_\_\_\_

44. a. Mention any one way the colonialists used to show that they had control over an area.

\_\_\_\_\_

b. Give any two reasons that made the African natives to resist payment of taxes.

i. \_\_\_\_\_

ii. \_\_\_\_\_

c. State any one reason why the colonialists did not want the natives of Kenya to grow cash crops.

\_\_\_\_\_

45. a. Why was early man known as the Stone Age man?

c. Mention any two methods Stone Age men used to kill the animals for food.

i. \_\_\_\_\_

ii. \_\_\_\_\_

c. How did the discovery of Iron change man's way of life?

\_\_\_\_\_

46. a. Which United Nations Agency is responsible for;

- preserving culture and promoting research?

\_\_\_\_\_

- caring for refugees?

\_\_\_\_\_

b. State any two ways in which the Red Cross cares for war victims.

i. \_\_\_\_\_

ii. \_\_\_\_\_

47. a. What do you call a place where weather is recorded?

\_\_\_\_\_

b. Write any two elements of weather which are recorded at the place you have named in (a) above.

i. \_\_\_\_\_

ii. \_\_\_\_\_

c. Mention any one way the recorded information about weather benefits the people in the community.

\_\_\_\_\_

48. a. Which was the largest inland slave market in East Africa?

\_\_\_\_\_

b. Give any two ways Arabs used to get slaves in East Africa.

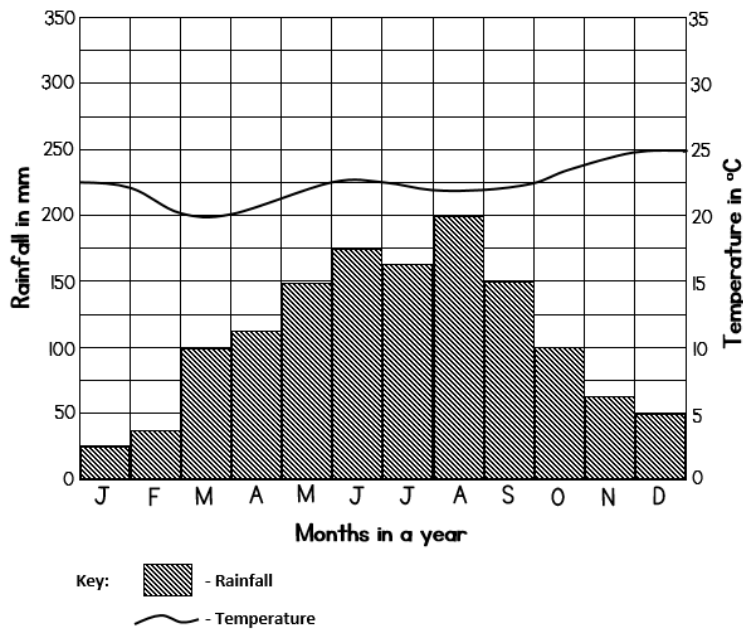
i. \_\_\_\_\_

ii. \_\_\_\_\_

c. Mention any one result of slave trade in East Africa.

\_\_\_\_\_

49. Below is a climatic graph of Town A. study it carefully and answer questions that follow.



- a. In which month did town A receive the highest amount of rainfall?

\_\_\_\_\_

\_\_\_\_\_

- b. Name the month in which the highest temperature was recorded to town A above.

\_\_\_\_\_

\_\_\_\_\_

- c. What was the temperature range of town A?

\_\_\_\_\_

- d. Name the type of climate experienced in this town.

\_\_\_\_\_

50. Use the sketch map of East Africa below and answer the questions that follow.



- a. Name the port marked S.

\_\_\_\_\_

\_\_\_\_\_

- b. Give any one economic activity that is carried out at port S.

\_\_\_\_\_

\_\_\_\_\_

- c. Name the part of River Nile marked with letter L.

\_\_\_\_\_

- d. Use letter P to mark the deepest lake in East Africa.

For each of the questions 51 to 55, answer EITHER the Christian OR Islamic questions but not both. No marks will be awarded to a candidate who attempts both alternatives in a particular number.

51. EITHER:

a. Mention any two things you learn from Jesus Christ when he was a child.

i. \_\_\_\_\_

ii. \_\_\_\_\_

b. Give any two things Jesus Christ did to show love to people.

i. \_\_\_\_\_

ii. \_\_\_\_\_

OR:

a. Mention any two things you learn from prophet Muhammad (PBUH) when he was a child.

i. \_\_\_\_\_

ii. \_\_\_\_\_

b. Give any two things Prophet Muhammad did to show love to people.

i. \_\_\_\_\_

ii. \_\_\_\_\_

52. EITHER:

a. State any two things that happened immediately after Jesus Christ's death on the cross.

i. \_\_\_\_\_

ii. \_\_\_\_\_

b. Mention the man who went to Pilate to request for Jesus Christ's body.

\_\_\_\_\_

c. Where was Christ's body buried?

\_\_\_\_\_

OR:

a. State any two things that happened immediately Prophet Muhammad died.

i. \_\_\_\_\_

ii. \_\_\_\_\_



b. Name the first successor of Prophet Muhammad (PBUH).

---

c. Where was Prophet Muhammad buried?

---

53. EITHER:

a. Name the organization that unites the Roman Catholic, Orthodox and Church of Uganda.

---

b. State any three functions of this Organization you have mentioned in (a) above.

i. \_\_\_\_\_

ii. \_\_\_\_\_

iii. \_\_\_\_\_

OR:

a. Name the organization that unities the Muslims in Uganda.

---

b. State any three functions of this organization you have mentioned in (a) above.

i. \_\_\_\_\_

ii. \_\_\_\_\_

iii. \_\_\_\_\_

54. EITHER:

a. What is marriage in Christianity?

---

b. State any two reasons why Church marriage is important.

i. \_\_\_\_\_

ii. \_\_\_\_\_

iii. \_\_\_\_\_

c. Mention any one gift God gives to married people.

---

OR:

a. What is Nikah in Islam?

---

b. Mention any two reasons why Nikah is important.

i. \_\_\_\_\_

ii. \_\_\_\_\_

c. Mention any one gift Allah gives to married people.

---

EITHER:

a. Who is a Reverend/Priest?

---

b. State any three ways which a Reverend/Priest is important in our community.

i. \_\_\_\_\_

ii. \_\_\_\_\_

iii. \_\_\_\_\_

OR:

a. Who is an Imam?

---

b. State any three ways in which an Imam is important in our community.

i. \_\_\_\_\_

ii. \_\_\_\_\_

iii. \_\_\_\_\_